



प्रधान मुख्य आयकर आयुक्त का कार्यालय, कर्नाटक एवं गोवा क्षेत्र, बेंगलूरु.  
**OFFICE OF THE PRINCIPAL CHIEF COMMISSIONER OF INCOME TAX,  
KARNATAKA & GOA REGION, BENGALURU.**

केंद्रीय राजस्व भवन, नं : 1, क्वींस रोड, बेंगलूरु - 560 001.

Central Revenue Building, No.1, Queen's Road, Bengaluru - 560 001.

टेली / Telephone : 080-2286 4273

फैक्स / Fax : 080-2286 6659

F.No.205(9)/SPORTS APPT./2024-25/Pr.CCIT

Date: 21-08-2024

**MEMORANDUM**

**Sub: Examination for Recruitment of Meritorious Sports Persons in the  
cadre of Inspector of Income Tax, Tax Assistant, Multi Tasking Staff,  
2022-23 – Uploading of Answer Keys along with Question Paper – Reg.**

\*\*\*\*\*

In compliance to Hon'ble CAT, Bengaluru Bench, the answer keys along with Question Paper of Examination for Recruitment of Meritorious Sports Persons in the cadre of Inspector of Income Tax, Tax Assistant, Multi Tasking Staff, 2022-23, is uploaded herewith on the Official Website of Income Tax Department, Karnataka & Goa Region.

  
(ANAND)

Dy. Commissioner of Income-tax(HQ)(Admn.)  
for Pr. Chief Commissioner of Income-tax  
Karnataka & Goa Region, Bangalore

Encl. : Answer Keys along with Question Paper.

**EXAMINATION FOR RECRUITMENT OF MERITORIOUS SPORTS PERSONS IN THE  
CADRE OF INSPECTOR OF INCOME TAX, TAX ASSISTANT AND MULTI TASKING  
STAFF 2022-23.**

O/o Principal Chief Commissioner of Income-Tax, Karnataka and Goa Region, Bengaluru  
**PAPER-I**

**(Question-Cum Answer (QCA) Booklet)**

<b>(QCA) Booklet No:</b>	
<i>Time Allowed</i>	<i>Two Hours</i>
<i>No. of Questions</i>	<b>125</b>
<i>Maximum Marks</i>	<b>250</b>

<i>(To be filled by the candidate)</i>	
<b>Name of the Candidate</b>	
<b>Roll Number</b> <i>(As mentioned in Admission Certificate)</i>	

**INSTRUCTIONS**

1. Immediately after commencement of the Examination, candidates are advised to check that this (QCA) Booklet does not have any unprinted or torn or missing pages or items, etc. if any such deficiency is found, candidates should get it replaced by a complete (QCA) Booklet from the Invigilator.
2. Please fill in the Name and Roll Number (as per Admission Certificate) in the space provided above carefully and without any omission or discrepancy. **DO NOT** write anything else on the (QCA) Booklet. Space for rough work is provided in the (QCA) Booklet at the end.
3. This (QCA) Booklet contains 125 questions. All questions are compulsory and carry equal marks. Each question is printed both in Hindi and English, except questions from 86 to 115 pertaining to English Language and Comprehension. (Note: - No marks will be deducted for wrong answer.)
4. Each question has Four Responses (Answers). Candidates should select the correct Response (Answer) e.g., A, B, C or D and write the same in the Answer Box provided in front of the question e.g., 

Answer	A
--------	---
5. Choose **ONLY ONE RESPONSE (ANSWER)** for each question. Multiple responses if recorded will not be considered and no marks will be awarded for such question. Do not overwrite.
6. Candidates have to mark all the responses in (QCA) Booklet **ONLY** and no separate Answer Sheet will be provided.
7. At the end of the examination, (QCA) Booklet should be handed over to the invigilator. Candidates are not allowed to carry the (QCA) Booklet after examination.
8. **No** electronic gadgets including digital watches, calculators, mobile phone etc are allowed inside examination hall.
9. The responses (Answers) should be written in answer box using Blue/Black pen only.

<b>Invigilator's Signature</b>	<b>Signature of the candidate</b>
--------------------------------	-----------------------------------



Q.1	Library is to _____ like Bouquet is to flowers. Choose a meaningful English word from the following options to fill in the blank.	Answer	B
Ans.	A) Building B) Books C) People D) Road		
Q.2	KEPT: EKTP HAVE: AHEV Following the above pattern choose the correct option to fill in the blank. STOP: _____	Answer	A
Ans.	A) TSPO B) POST C) POTS D) TPSO		
Q.3	Which of the following numbers will replace the question mark "?" in the given series: 1, 3, 6, 10, 15, ?	Answer	D
Ans.	A) 20 B) 22 C) 11 D) 21		
Q.4	Arrange the following words in the sequence in which they occur in the English Dictionary and then choose the correct sequence. (A) Select (B) Seldom (C) Send (D) Selfish (E) Seller	Answer	C
Ans.	A) A, B, D, E, C B) B, A, E, D, C C) B, A, D, E, C D) B, C, D, A, E		
Q.5	Pointing to Mohan, Meera said, "His mother is the only daughter of my mother." How is the Meera related to Mohan?	Answer	A
Ans.	A) Mother B) Daughter C) Sister D) Grandmother		
Q.6	If Earth is a Planet, then Moon is ____. Choose a meaningful English word from the following options to fill in the blank.	Answer	C
Ans.	A) Rocket		

	B) Space C) Satellite D) Orbit	
--	--------------------------------------	--

<b>Q.7</b>	Select the option in which the words share the same relationship as that shared by the given pair of words. <b>Electricity: Television</b>	Answer   B
<b>Ans.</b>	A) Crops: Farmer <b>B) Petrol: Car</b> C) Diesel: Fuel D) Temperature: Refrigerator	

<b>Q.8</b>	Rahul's mother Monika is the only daughter of her father. How is Monika's father related to Rahul?	Answer   C
<b>Ans.</b>	A) Uncle B) Father <b>C) Grandfather</b> D) Brother	

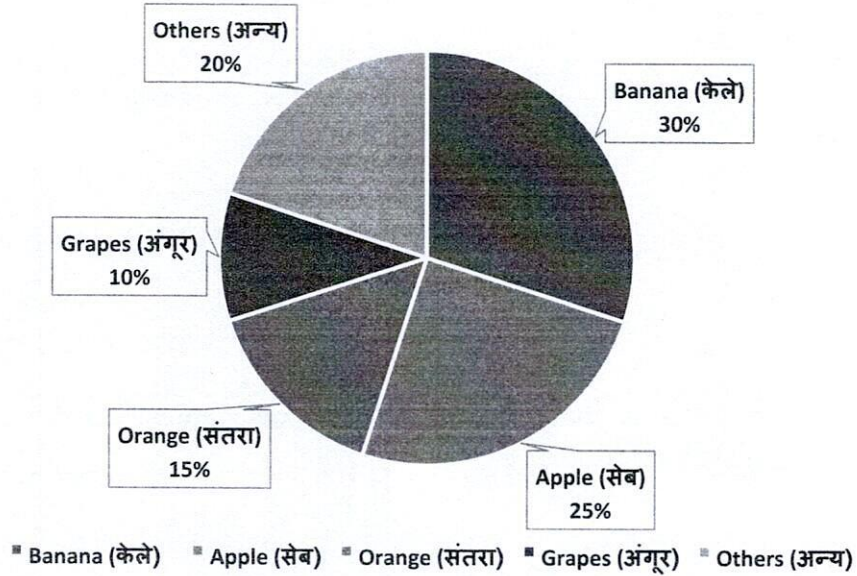
<b>Q.9</b>	Four words have been given, out of which three are alike in some manner and one is different. Select the word that is different.	Answer   B
<b>Ans.</b>	A) Resist <b>B) Allow</b> C) Stop D) Prohibit	

<b>Q.10</b>	Alekhya was born one year after her mother's marriage. Her father is two years elder than her mother but twenty-five years older than Alekhya, who is six years old. At what age did the mother get married?	Answer   A
<b>Ans.</b>	<b>A) 22 years</b> B) 25 years C) 21 years D) 31 years	

The below pie chart shows the sale of different fruits in a day for a shop. Answer the questions 11 to 13 based on the pie chart:

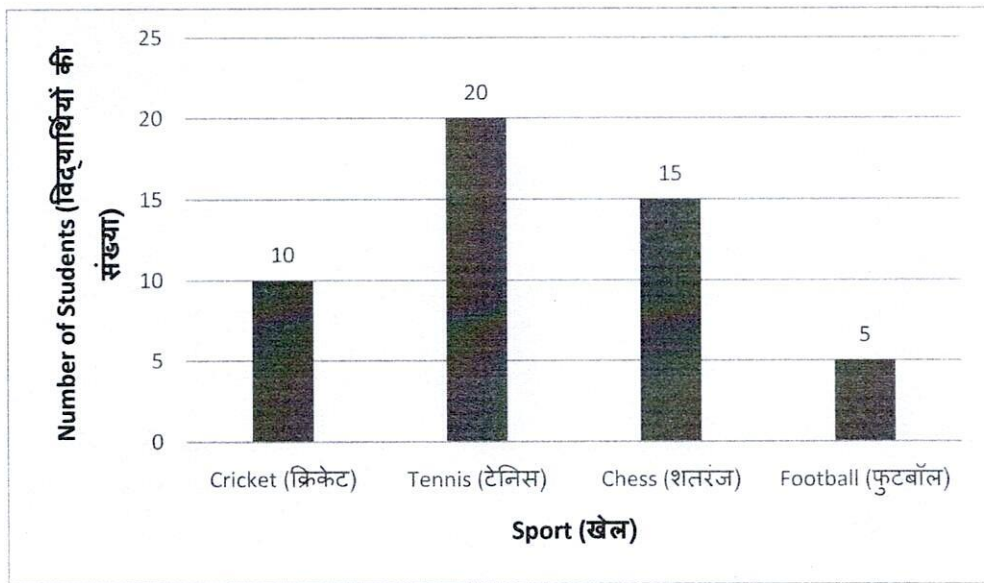


Fruits sale in a day. / फलो की एक दिन की बिक्री



Q.11	If a total of 1000 Kg of fruits were sold in a day, calculate the amount of bananas sold (In Kg).	Answer	D
Ans.	A) 90 Kg. B) 180 Kg. C) 360 Kg. D) 300 Kg.		
Q.12	If a total of 1000 Kg of fruits were sold in a day, calculate the difference in the amount of bananas and apples sold (In Kg).	Answer	B
Ans.	A) 75 Kg. B) 50 Kg. C) 100 Kg. D) 150 Kg.		
Q.13	If a total of 1000 Kg of fruits were sold in a day, calculate the total amount of apples and grapes sold (In Kg).	Answer	C
Ans.	A) 100 Kg. B) 250 Kg. C) 350 Kg. D) 300 Kg.		

The bar graph given below represents the favourite sports of 50 students. Answer the questions 14 to 16 based on the bar graph:



**Q.14** How many students have Cricket or Chess as their favourite sport?

- Ans.** A) 5  
B) 20  
C) 25  
D) 30

**Answer** C

**Q.15** Which of the following sports is most preferred/favourite of the students?

- Ans.** A) Chess  
B) Football  
C) Cricket  
D) Tennis


**Answer** D

**Q.16** How many students favour a sport other than football?


- Ans.** A) 50  
B) 45  
C) 35  
D) 5

**Answer** B

**Q.17** Out of the given answer figures, which is the correct one to replace the question mark?

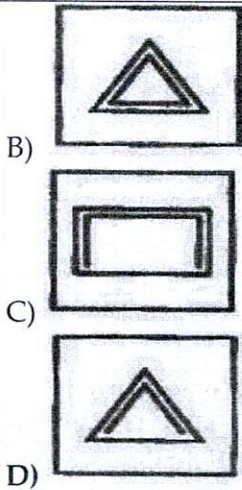


**Ans.**



**Answer** D





**Q.18** Akash runs 8 km to the South. Then he turns to his right and walks 4 km. Then again, he turns to his right and runs 8 km forward. How far is he from the starting point?

Answer | C

- Ans.** A) 8 km  
 B) 6 km  
 C) 4 km  
 D) 12 km

**Q.19** Sachin, Saurav, Sehwag and Dravid are playing Carrom. Sachin and Dravid are in one team. Saurav is sitting to the left of Dravid. Who are the 2 players sitting adjacent to Sachin?

Answer | B

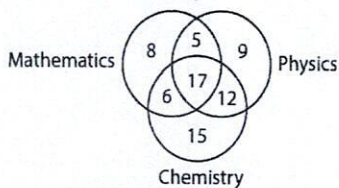
- Ans.** A) Dravid and Sehwag  
 B) Saurav and Sehwag  
 C) Saurav and Dravid  
 D) None of the above

**Q.20** A, B, C, D, E and F, are sitting at a round table, not necessarily in that order. A is between D and F, C is opposite to D, D and E are not on neighbouring chairs. Which one of the following pairs must be sitting on neighbouring chairs?

Answer | B

- Ans.** A) A and B  
 B) C and E  
 C) B and F  
 D) A and C

**Q.21** In the given figure, how many students study only 2 subjects?



Answer | D

- Ans.** A) 11  
 B) 17  
 C) 40

	D) 23	
<b>Q.22</b>	From the given alternatives select the word which <b>cannot</b> be formed using the letters of the word- "CHARACTER"	Answer   A
<b>Ans.</b>	A) HEARTY B) CRATE C) TRACER D) CHARTER	
<b>Q.23</b>	Names of 4 Indian cities are given below. Select the one which is different from the other three cities.	Answer   D
<b>Ans.</b>	A) Mumbai B) Chennai C) Kolkata D) Mysuru	
<b>Q.24</b>	Go through this series: 36, 34, 30, 28, 24, ... What number should come next?	Answer   B
<b>Ans.</b>	A) 20 B) 22 C) 23 D) 26	
<b>Q.25</b>	The cost of one Football is Rs. 70. Raj has Rs 380/- with him. What is the maximum number of Footballs Raj can buy?	Answer   C
<b>Ans.</b>	A) 2 B) 3 C) 5 D) 6	
<b>Q.26</b>	Venkatesh has Rs. 300 in the denominations of five-rupee notes and ten-rupee notes. The number of notes of each denomination are equal. What is the total number of notes that Venkatesh has?	Answer   D
<b>Ans.</b>	A) 45 B) 50 C) 35 D) 40	
<b>Q.27</b>	In following pairs, the name of cricket stadium and the respective city are given, which of the following is incorrect? A) Green Park Stadium: Kanpur B) Eden Gardens: Kolkata C) Barabati Stadium: Cuttack D) M. Chinnaswamy Stadium: Chennai	Answer   D
<b>Ans.</b>	A) A B) B C) C	



	D) D	
Q.28	Cirrhosis is to the liver; what meningitis is to _____:	
Ans.	A) Kidneys B) Brain C) Stomach D) Knees	Answer B
Q.29	Pankaj a renowned rower, rows at a speed of 5 kmph in still water. He is rowing in a river, downstream, which is flowing at the speed of 10 kmph. How much time will Pankaj take to reach 30 kilometres.	Answer D
Ans.	A) 0.5 Hours B) 1 Hour C) 1.5 Hours D) 2 Hours	
Q.30	In a Gregorian calendar year how, many months have 31 days?	
Ans.	A) 6 B) 7 C) 8 D) 5	Answer B
Q.31	National Sports Day of India is celebrated on 29 August every year to commemorate the birth anniversary of which of the following sportsperson?	Answer C
Ans.	A) Dara Singh B) Milkha Singh C) Major Dhyan Chand D) Mansoor Ali Khan Pataudi	
Q.32	The term "Dolphin Kick" is associated with which of the following games?	Answer D
Ans.	A) Rugby B) Badminton C) Football D) Swimming	
Q.33	Who was the first Indian woman to win an Olympic medal?	
Ans.	A) Karnam Malleswari B) Saina Nehwal C) Mary Kom D) P T Usha	Answer A
Q.34	Which day was declared as the International Day of Yoga, by the United Nations General Assembly?	Answer D
Ans.	A) 5 <sup>th</sup> June B) 7 <sup>th</sup> June	



	C) 8 <sup>th</sup> June D) 21 <sup>st</sup> June	
<b>Q.35</b>	<b>The "Olympic Games" in 2024 will be held in which of the following place?</b>	<b>Answer</b>   <b>B</b>
<b>Ans.</b>	A) Los Angeles <b>B) Paris</b> C) Brisbane D) Gangwon	
<b>Q.36</b>	<b>Who amongst the following Indian sportsperson did not win a medal in Tokyo Summer Olympics- 2020?</b>	<b>Answer</b>   <b>C</b>
<b>Ans.</b>	A) Mirabai Chanu B) Neeraj Chopra <b>C) Deepika Kumari</b> D) P V Sindhu	
<b>Q.37</b>	<b>Which Indian state hosted the Men's Hockey World Cup- 2023.</b>	<b>Answer</b>   <b>A</b>
<b>Ans.</b>	A) Odisha B) Karnataka C) Assam D) Punjab	
<b>Q.38</b>	<b>Yakshagana, a traditional Indian dance drama is popular in which of the following states of India?</b>	<b>Answer</b>   <b>B</b>
<b>Ans.</b>	A) Tamil Nadu <b>B) Karnataka</b> C) Kerala D) Madhya Pradesh	
<b>Q.39</b>	<b>What was Hampi widely famous for?</b>	<b>Answer</b>   <b>A</b>
<b>Ans.</b>	A) It was the capital of Vijayanagara Empire B) It was the capital of Golconda C) It had the translation of the Indian epics to Persian D) It had the largest stable in medieval India	
<b>Q.40</b>	<b>At which of the following places did Lord Buddha give his first sermon on the Four Noble Truths?</b>	<b>Answer</b>   <b>C</b>
<b>Ans.</b>	A) Lumbini B) Bodh Gaya <b>C) Sarnath</b> D) Rajgir	
<b>Q.41</b>	<b>In which Indian state are Ajanta Caves located?</b>	<b>Answer</b>   <b>A</b>
<b>Ans.</b>	A) Maharashtra B) Haryana C) Manipur	



	D) Karnataka	
<b>Q.42</b>	<b>India consists of how many states and Union territories?</b>	
<b>Ans.</b>	A) 29 states and 8 Union territories B) 29 states and 9 Union territories C) 28 states and 9 Union territories <b>D) 28 states and 8 Union territories</b>	<b>Answer</b>   <b>D</b>
<b>Q.43</b>	<b>Where is the Statue of Unity located?</b>	
<b>Ans.</b>	A) Rajasthan B) Karnataka <b>C) Gujrat</b> D) Maharashtra	<b>Answer</b>   <b>C</b>
<b>Q.44</b>	<b>Who led the Salt March, also known as, Dandi March during Indian Independence struggle?</b>	
<b>Ans.</b>	A) Sardar Vallabhbhai Patel B) Dadabhai Naoroji C) Lokmanya Tilak <b>D) Mahatma Gandhi</b>	<b>Answer</b>   <b>D</b>
<b>Q.45</b>	<b>Who of the following freedom fighters was associated with "Azad Hind Fauz"?</b>	
<b>Ans.</b>	A) Bhagat Singh <b>B) Subash Chandra Bose</b> C) Chandrashekhhar Azad D) Udham Singh	<b>Answer</b>   <b>B</b>
<b>Q.46</b>	<b>Who is the President of India?</b>	
<b>Ans.</b>	A) Jagdeep Dhankhar <b>B) Droupadi Murmu</b> C) Om Birla D) Ram Nath Kovind	<b>Answer</b>   <b>B</b>
<b>Q.47</b>	<b>Which of the following is NOT a Fundamental Right?</b>	
<b>Ans.</b>	A) Right to Freedom of Religion B) Right against Exploitation C) Right to Equality <b>D) Right to Vote</b>	<b>Answer</b>   <b>D</b>
<b>Q.48</b>	<b>What is the minimum age required to qualify as a voter in India?</b>	
<b>Ans.</b>	A) 25 years B) 21 years <b>C) 18 years</b> D) 30 years	<b>Answer</b>   <b>C</b>
<b>Q.49</b>	<b>The Indian Parliament comprises which of the following?</b>	



Ans.	A) President, Rajya Sabha and Lok Sabha. B) President, Rajya Sabha, Lok Sabha and Governors of all the states. C) Rajya Sabha, Lok Sabha and Chief Ministers of all the states. D) Only Lok Sabha.	Answer	A
Q.50	Who among the following can remove the Governor of a State from office?	Answer	B
Ans.	A) Union Home Minister B) President C) Chief Minister of concerned state D) Parliament		
Q.51	Bandipur National Park is located in which of the following Indian States?	Answer	D
Ans.	A) Tripura B) Madhya Pradesh C) Andhra Pradesh D) Karnataka		
Q.52	Atoms of which element combines with hydrogen to give water?	Answer	B
Ans.	A) Carbon B) Oxygen C) Iodine D) Nitrogen		
Q.53	Which of the following vitamin is most essential for development of bones?	Answer	D
Ans.	A) Vitamin K B) Vitamin C C) Vitamin A D) Vitamin D		
Q.54	Which of the following diseases is caused by mosquito bite?	Answer	A
Ans.	A) Malaria B) Goitre C) Typhoid D) Plague		
Q.55	India signed a MoU with _____ for reintroduction of cheetah and wildlife conservation, which paved the way for reintroduction of cheetahs in Kuno National Park.	Answer	B
Ans.	A) USA B) Namibia C) China D) Tanzania		
Q.56	In the context of agricultural costs in India, what is MSP?		



Ans.	A) Midterm Supply Plan B) Maximum Selling Price C) Model Stability Product D) <b>Minimum Support Price</b>	Answer	D										
Q.57	Which of the following economic activities employs the maximum number of people in India?	Answer	C										
Ans.	A) Tourism B) Manufacturing C) <b>Agriculture</b> D) Mining												
Q.58	Which country does not share border with India?	Answer	B										
Ans.	A) Bangladesh B) <b>Singapore</b> C) Myanmar D) China												
Q.59	Which of the following Monsoons account for most of the rainfall in India?	Answer	A										
Ans.	A) <b>South-West Monsoon</b> B) North-East Monsoon C) South – East Monsoon D) North – West Monsoon												
Q.60	Which of the following Indian State has longest coastline?	Answer	A										
Ans.	A) <b>Gujarat</b> B) Goa C) West Bengal D) Maharashtra												
Q.61	The table given below shows the number of cars sold by 4 companies. <table border="1" data-bbox="231 1400 801 1601"> <thead> <tr> <th>Company</th> <th>Number of cars sold</th> </tr> </thead> <tbody> <tr> <td>A</td> <td>60</td> </tr> <tr> <td>B</td> <td>90</td> </tr> <tr> <td>C</td> <td>120</td> </tr> <tr> <td>D</td> <td>165</td> </tr> </tbody> </table> <p>What is the ratio of number of cars sold by B to the number of cars sold by D?</p>	Company	Number of cars sold	A	60	B	90	C	120	D	165	Answer	D
Company	Number of cars sold												
A	60												
B	90												
C	120												
D	165												
Ans.	A) 11 : 5 B) 11 : 6 C) 5 : 13 D) <b>6 : 11</b>												
Q.62	Following table gives the subscription (Rupees in crores) of different schemes of a Mutual Fund Company over six months: <table border="1" data-bbox="231 1960 1204 2004"> <thead> <tr> <th>Months</th> <th>Schemes</th> <th>Total</th> </tr> </thead> </table>	Months	Schemes	Total	Answer	A							
Months	Schemes	Total											



	X	Y	Z	
September	30	45	60	135
October	70	50	50	170
November	25	35	40	100
December	40	30	55	125
January	70	25	35	130
February	30	40	30	100

What is the difference in the subscription of scheme "Y" between October and January?

- Ans. A) 25 crores  
B) 40 crores  
C) 25 crores  
D) 10 crores

Q.63 Harish sold a bull for Rs. 60,000/-, at a profit of 20%. For what price should he have sold to gain a 30% profit?

Answer B

- Ans. A) Rs.64,000  
B) Rs.65,000  
C) Rs.50,000  
D) Rs.55,000

Q.64 A car runs 500 km on 25 Litres of diesel. How many kilometres can it run on 30 Litres of diesel?

Answer D

- Ans. A) 450 km  
B) 650 km  
C) 550 km  
D) 600 km

Q.65 If 450 men can finish construction of an apartment in 20 days, then how many men are needed to complete the same work in 30 days?

Answer B

- Ans. A) 150  
B) 300  
C) 400  
D) 250

The following table shows the marks obtained by six students in four different subjects in an examination. Maximum marks in each subject are 100.

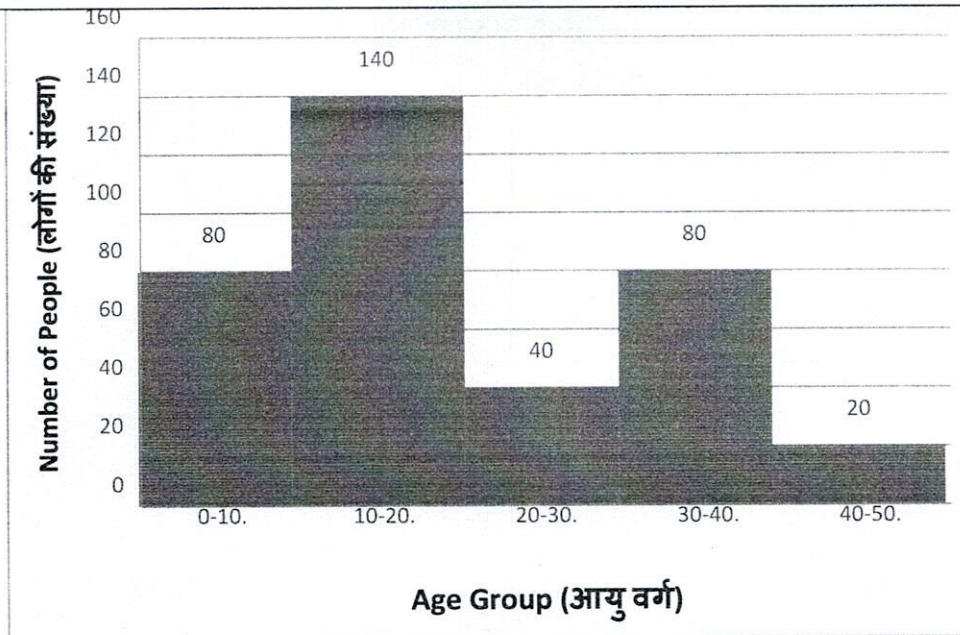
Student	Subject				Total
	English	Physics	Chemistry	Maths	
A	92	90	90	80	352
B	90	80	85	85	340
C	80	80	65	70	295
D	85	80	82	75	322
E	80	75	75	85	315
F	90	90	90	85	355
Total	517	495	487	480	

Answer the questions 66 to 68 based on the above table.



Q.66	What is the number of students whose overall marks obtained are 80% and above?	Answer	A
Ans.	A) 4 B) 5 C) 2 D) 3		
Q.67	If the total marks obtained by all the students are arranged in descending order, which student obtained 3 <sup>rd</sup> highest marks?	Answer	C
Ans.	A) F B) A C) B D) D		
Q.68	In which subject the average marks obtained by students is highest?	Answer	D
Ans.	A) Physics B) Chemistry C) Maths D) English		
Q.69	In the first 10 overs of a cricket game, the run rate was only 3.2. What should be the run rate in the remaining 40 overs to reach the target of 272 runs?	Answer	A
Ans.	A) 6 B) 5 C) 8 D) 7		
Q.70	Three candidates, Ajay, Bijoy & Chandu contested an election and received 1800, 3300 and 3900 votes respectively. What percent of the total votes did Ajay get?	Answer	A
Ans.	A) 20% B) 40% C) 45% D) 70%		
Q.71	The distance between Ravi's home and his practice ground is 10 Km. The practice starts at 8 AM. Ravi starts from his home at 7:30 AM. At what constant speed should Ravi run so as to reach practice in time.	Answer	B
Ans.	A) 10 km/hr. B) 20 km/hr. C) 15 km/hr. D) 05 km/hr.		

The following histogram shows the data regarding number of people from different age groups who visited the stadium to watch a Football match. Answer the questions 72 to 74 based on the following histogram.



**Q.72** How many people under 20 years of age visited the stadium to watch a Football match?

Answer | C

**Ans.** A) 80  
B) 140  
C) 220  
D) 260

**Q.73** How many people over 40 years of age visited the stadium to watch a Football match?

Answer | B

**Ans.** A) 100  
B) 20  
C) 140  
D) None of the above

**Q.74** People in the age groups of 10-20 & 20-30 constitute what % of the total people who visited the stadium to watch a Football match?

Answer | A

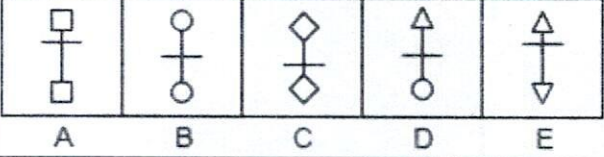
**Ans.** A) 50%  
B) 45%  
C) 55%  
D) 60%

**Q.75** Which of the following numbers is a square of 12?

Answer | B

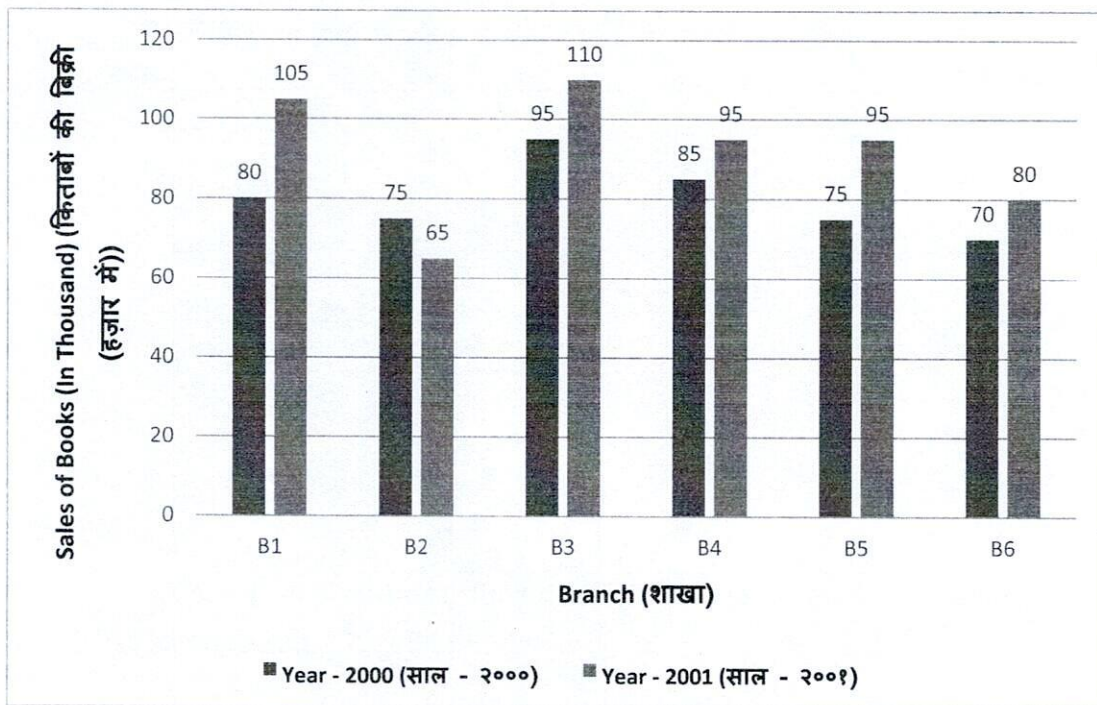
**Ans.** A) 141  
B) 144  
C) 124  
D) 120



Q.76	Which of the following figures is different from others? 	Answer   D
Ans.	A) A B) D C) C D) E	

The bar graph given below shows the sales of books (in thousand number) from six branches of a publishing company during two consecutive years 2000 and 2001. Answer the questions 77 to 81 based on the following bar diagram.

Sales of Books (in thousand numbers) from Six Branches - B1, B2, B3, B4, B5 and B6 of a publishing Company in 2000 and 2001.



Q.77	What is the ratio of the total sales of branch B2 for both years to the total sales of branch B4 for both years?	Answer   D
Ans.	A) 2:3 B) 3:5 C) 4:5 D) 7:9	
Q.78	Total sales of branch B6 for both the years is what percent of the total sales of branches B3 for both the years?	Answer   C
Ans.	A) 68.54% B) 71.11% C) 73.17%	

D) 75.55%

**Q.79** Which branch had the highest sales for both the years put together?

- Ans.** A) B1  
B) B4  
C) B6  
D) B3

**Answer** D

**Q.80** What are the average sales of all the branches (in thousand numbers) for the year 2000?

- Ans.** A) 73  
B) 80  
C) 83  
D) 88

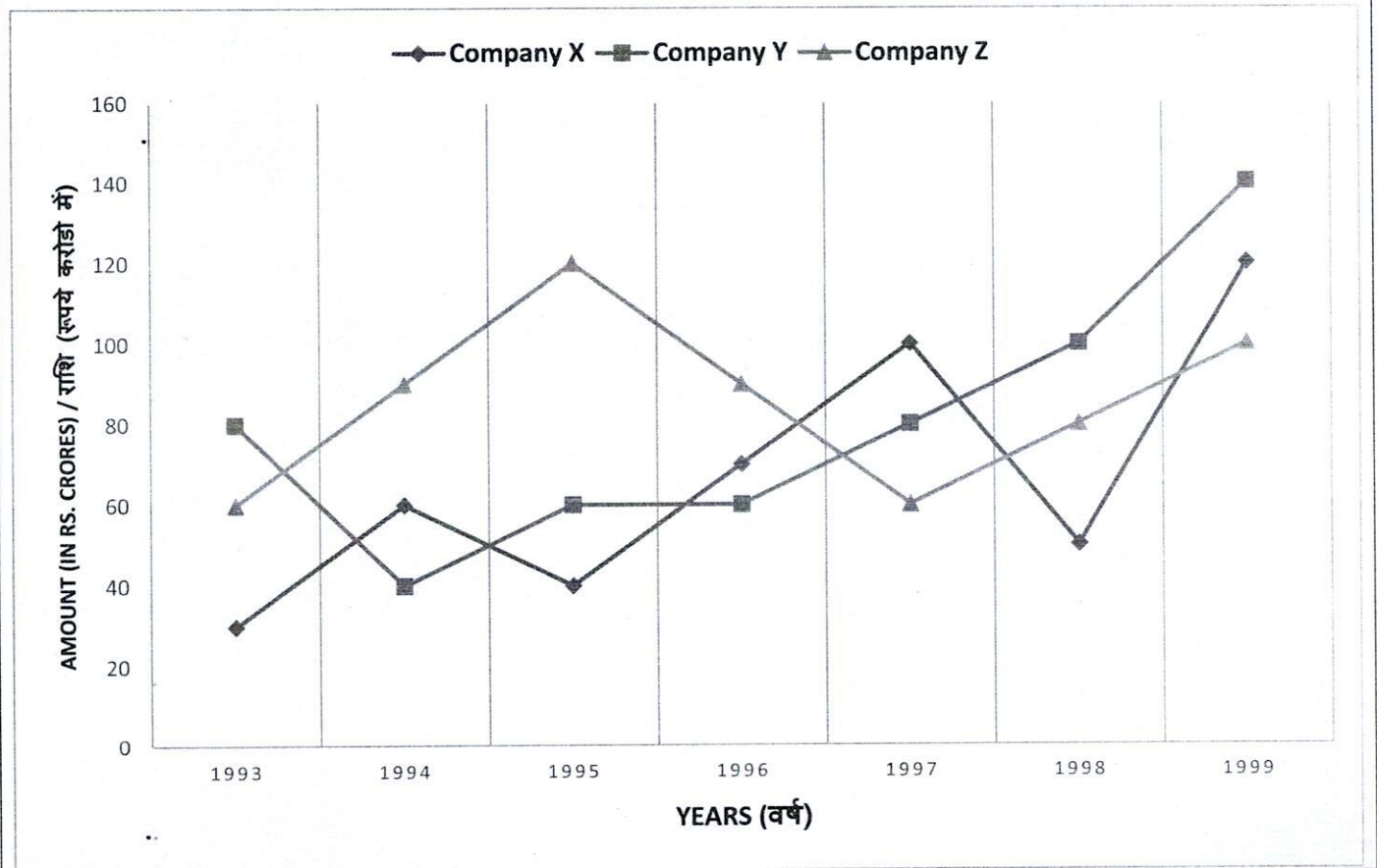
**Answer** B

**Q.81** Total sales of branches B1, B3 and B5 together for both the years (in thousand numbers) is?

- Ans.** A) 250  
B) 310  
C) 435  
D) 560

**Answer** D

Study the following line graph showing year wise value (In Crores) of export of sports equipment by three companies X, Y & Z and answer the questions 82 to 85.





Q.82	In which of the following year the Company Y exported more sports equipment than Company X?	Answer	D
Ans.	A) 1994 B) 1996 C) 1997 D) 1998		
Q.83	In which year was the difference between the exports from Companies X and Y minimum?	Answer	C
Ans.	A) 1994 B) 1995 C) 1996 D) 1997		
Q.84	What was the total value of the exports by 3 companies in 1997?	Answer	C
Ans.	A) Rs. 210 crores B) Rs. 230 crores C) Rs. 240 crores D) Rs. 250 crores		
Q.85	In how many of the given years, were the exports from Company Z more than the exports from Company Y?	Answer	C
Ans.	A) 1 B) 2 C) 3 D) 4		
Q.86	Select the INCORRECTLY spelt word.	Answer	D
Ans.	A) Cemetery B) Accommodate C) Intruder D) Neccessary		
Q.87	Choose the correct meaning of the given idiom; - "A skeleton in the cupboard"	Answer	D
Ans.	A) A cupboard in Orthopaedic clinic. B) A coffin in the cemetery. C) A secret to be announced publicly. D) An embarrassing fact to be kept secret		
Q.88	Select the option that can be used as a one-word substitute for the following word. "Expert"	Answer	A
Ans.	A) Skilful B) Incompetent C) Amateur D) Inexperienced		



Q.89	Select the correct passive form of the following given sentence. "He has downloaded the movie on his phone".	Answer	A
Ans.	A) The movie has been downloaded by him on his phone. B) The movie was downloaded by him on his phone. C) The movie is been downloaded by him on his phone. D) The movie are being downloaded by him on his phone.		
Q.90	Which is the most appropriate ANTONYM of the word "fertile"?	Answer	C
Ans.	A) Fecund B) Rich C) Barren D) Wet		
Q.91	Which is the most appropriate SYNONYM of the word "Brief"?	Answer	D
Ans.	A) Long B) Big C) Massive D) Short		
Q.92	Which is the most appropriate ANTONYM of the word "Casual"?	Answer	C
Ans.	A) Spiritual B) Relaxed C) Formal D) Open		
Q.93	Which is the most appropriate SYNONYM of the word "Competent"?	Answer	C
Ans.	A) Complex B) Poor C) Capable D) Beginner		
Q.94	Select the most appropriate option to fill in the blank. The planets are _____ around the sun.	Answer	A
Ans.	A) Revolving B) Vibrating C) Jumping D) Running		
Q.95	Select the correct active form of the given sentence. "The clothes will be delivered by the shop on Monday".	Answer	B
Ans.	A) The shop will be delivering the clothes on Monday. B) The shop will deliver the clothes on Monday. C) The shop would be delivering the clothes on Monday. D) The shop would deliver the clothes on Monday.		
Q.96	Select the most appropriate option to fill in the blank.		



	Scores are equal with just two minutes to go! This game's going _____"	Answer	B
Ans.	A) up to the plate B) down to the wire C) overboard D) skating on thin ice		
Q.97	Select the most appropriate option to fill in the blank. "The government has hardened it's _____ against the agitators and imposed a curfew in the area".	Answer	C
Ans.	A) Bearing B) Orientation C) Stand D) Manner		
Q.98	Select the most appropriate option to substitute the underlined segment in the given sentence. If no substitution is required, select 'No substitution'. "If you are not able to go out, <u>did not worry</u> ".	Answer	C
Ans.	A) No substitution B) don't worried C) do not worry D) worrying not		
Q.99	Select the option that can be used as a one-word substitute for the given group of words. "One who does not believe in the existence of God".	Answer	B
Ans.	A) Egotist B) Atheist C) Cynic D) Anarchist Question		
Q.100	Select the INCORRECTLY spelt word.	Answer	A
Ans.	A) Concensus B) Magnificent C) Articulate D) Colossal		
Q.101	The following sentence has been divided into parts. One of them contains an error. Select the part that contains the error from the given options. "Ranbir could not went / to the award ceremony / as he was busy / shooting / for a film /in Maldives".	Answer	A
Ans.	A) Ranbir could not went B) for a film C) to the award ceremony D) as he was busy		



Q.102	Select the most appropriate meaning of the following idiom. "Ball is in your court"	Answer	D
Ans.	A) Win easily B) Congratulations, you did it. C) You have to bat now. D) It's your decision or responsibility to do something now.		
Q.103	Select the option that expresses the following sentence in INDIRECT SPEECH: Kamal said, "I have done my work."	Answer	A
Ans.	A) Kamal said that he had done his work. B) Kamal said that I have done my work. C) Kamal said I have done my work. D) Kamal said that he has done his work.		
Q.104	Select the most appropriate meaning of the following idiom. "To take a chill pill"	Answer	C
Ans.	A) To gulp a tablet for a cold B) To drink cold water C) To calm down D) To ask a doctor for medication		
Q.105	Select the option that expresses the following sentence in DIRECT SPEECH: "George said that the weather was nice that day."	Answer	B
Ans.	A) The weather was nice today, said George. B) The weather is nice today, said George. C) The weather had been nice today, said George. D) None of the above		
<p>In the following passage, some words have been deleted. Fill in the blanks given in Q.106 to 110 with the help of the options given in each question. Select the most appropriate option for each number.</p> <p>Raman committed (1) _____ crime when he (2) _____ a bank. Someone (3) _____ the crime and told the police. The police charged him (4) _____ the crime and put him behind bars. They also accused his twin brother, Rohan, of being his (5) _____.</p>			
Q.106	Select the most appropriate option to fill in blank number 1.	Answer	B
Ans.	A) much B) a C) an D) many		
Q.107	Select the most appropriate option to fill in blank number 2.	Answer	D
Ans.	A) noticed B) liked C) observed		



	D) robbed	
Q.108	Select the most appropriate option to fill in blank number 3.	
Ans.	A) moved B) <b>witnessed</b> C) spoke D) signed	Answer   B
Q.109	Select the most appropriate option to fill in blank number 4.	
Ans.	A) in B) to C) <b>with</b> D) on	Answer   C
Q.110	Select the most appropriate option to fill in blank number 5.	
Ans.	A) <b>accomplice</b> B) colleague C) adventurer D) admirer	Answer   A
<p>In the following passage, some words have been deleted. Fill in the blanks given in Q.111 to 115 with the help of the options given in each question. Select the most appropriate option for each number.</p> <p>The Romans had developed a (1)___ for chariot racing. The (2)___ of the game are so excited that sometimes it may (3)___ into chaos, confusion and riots. The (4)___ in which racing took place was called a circus. The largest one was the Circus Maximus in (5)___, that could hold up to 3,85,000 spectators, which shows the popularity of the sport</p>		
Q.111	Select the most appropriate option to fill in blank number 1.	
Ans.	A) <b>taste</b> B) spoonful C) drop D) mouthful	Answer   A
Q.112	Select the most appropriate option to fill in blank number 2.	
Ans.	A) bystanders B) reformers C) critics D) <b>supporters</b>	Answer   D
Q.113	Select the most appropriate option to fill in blank number 3.	
Ans.	A) <b>result</b> B) reshape C) transfigure D) adapt	Answer   A
Q.114	Select the most appropriate option to fill in blank number 4.	
Ans.	A) <b>stadium</b>	Answer   A



	B) godown C) tent D) pool	
<b>Q.115</b>	<b>Select the most appropriate option to fill in blank number 5.</b>	
<b>Ans.</b>	A) London B) Paris <b>C) Rome</b> D) Washington	<b>Answer</b>   <b>C</b>
<b>Q.116</b>	<b>What does CPU stand for in computer system?</b>	
<b>Ans.</b>	A) Control Processing Unit B) Computer Programming Unit <b>C) Central Processing Unit</b> D) Computer Processing Unit	<b>Answer</b>   <b>C</b>
<b>Q.117</b>	<b>What does RAM stand for in computer system?</b>	
<b>Ans.</b>	A) Remote Access Memory <b>B) Random Access Memory</b> C) Reallocate Automatic Memory D) None of the above	<b>Answer</b>   <b>B</b>
<b>Q.118</b>	<b>Which of the following is NOT an input device in computer system?</b>	
<b>Ans.</b>	A) Mouse <b>B) Speakers</b> C) Keyboard D) Microphone	<b>Answer</b>   <b>B</b>
<b>Q.119</b>	<b>What is the role of computer ports?</b>	
<b>Ans.</b>	A) Linking to computer's Central Processing Unit B) Downloading the files <b>C) Communicating with computer peripherals</b> D) None of the above	<b>Answer</b>   <b>C</b>
<b>Q.120</b>	<b>Which of the following is a type of storage device?</b>	
<b>Ans.</b>	<b>A) Pen drive</b> B) Printer C) Mouse D) Key board	<b>Answer</b>   <b>A</b>
<b>Q.121</b>	<b>Which of the following keyboard keys are used to permanently delete a file/folder, so that the deleted file/folder will not be available in the Recycle Bin?</b>	<b>Answer</b>   <b>D</b>
<b>Ans.</b>	A) Ctrl + Shift B) Shift + Esc C) Ctrl + Alt <b>D) Shift + Delete</b>	



<b>Q.122</b>	<b>MS word is software of ____</b>	<b>Answer</b>	<b>A</b>
<b>Ans.</b>	A) Microsoft B) Android C) Google D) Apple		
<b>Q.123</b>	<b>To select all the text in MS Word document, which of the following key combination is used?</b>	<b>Answer</b>	<b>C</b>
<b>Ans.</b>	A) Ctrl +S B) Ctrl+ 1 C) Ctrl+ A D) Ctrl+ V		
<b>Q.124</b>	<b>Which one of the following is not an internet browser?</b>	<b>Answer</b>	<b>B</b>
<b>Ans.</b>	A) Microsoft Edge B) Tinder C) Mozilla Firefox D) Internet Explore		
<b>Q.125</b>	<b>Which of the following is NOT an output device in computer system?</b>	<b>Answer</b>	<b>C</b>
<b>Ans.</b>	A) Monitor B) Speakers C) Keyboard D) Printer		